
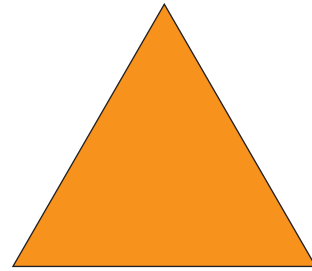


ODD AND EVEN WORD PROBLEMS

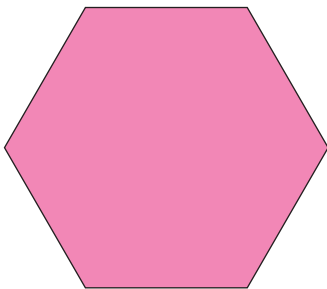
3. Which shape has an **ODD** number of sides?



_____ **ODD** **EVEN**



_____ **ODD** **EVEN**



_____ **ODD** **EVEN**



_____ **ODD** **EVEN**

4. Is there an **ODD** or **EVEN** number of letters in your name?

Write the letters of your name on the lines.

Number of letters: _____ **ODD** **EVEN**